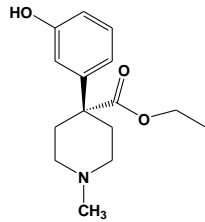


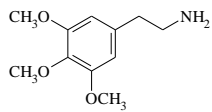
Ujian Fitokimia Bab 1, dikumpul hari Kamis jam 10 WIB di meja saya

Nama :
NIM :
Kelas :

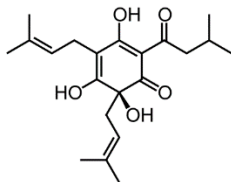
1. Sebutkan dan tandai building block pada senyawa di bawah ini !



a. **Pethidine**

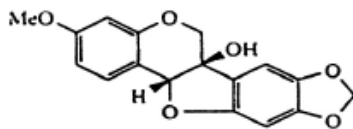


b. **15. Meskalina**



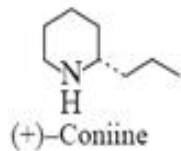
humulone

c.



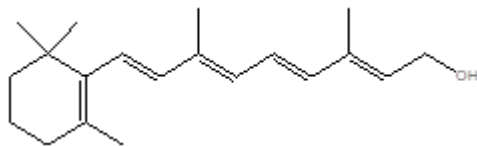
d.

pisatin



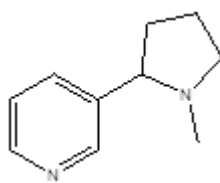
e.

(+)-Coniine



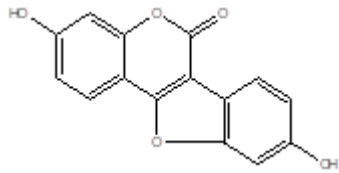
f.

Vitamin A



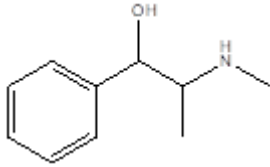
g.

Nikotin



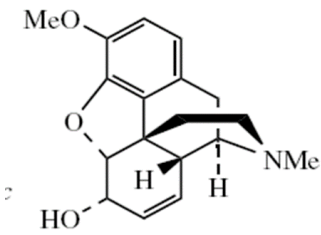
h.

Koumestrol



i.

Efedrin



codeine

j.

2. Jabarkan mekanisme reaksi pembentukan senyawa meskalin berikut ini :

